

# Home revise education Pvt. Ltd

## Geography

Time : 2 hours

Marks: 40

Note: 1. All questions are compulsory

2. Q. No 4 (A) & 6 ( A ) Should be attempted on outline map and graph paper resp.

---

**Q.1 choose the correct options & rewrite the sentences**

**( 4 )**

1. To the foothills of Aravali lies the -----

(a) Bundelkhand plateaus

(b) Malva plateaus

(c ) Mewad areas

(d ) Deccan plateaus

2. In India, mangroves are found in -----

(a) Himalayan region

(b) Swampy area

( c ) Desert areas

( d ) Rain shadow areas

3. The economy of brazil is dependent on the ----- activities

(a) Primary

(b) secondary

( c ) Tertiary

(d ) quaternary

4. As the -----extent of Brazil is more, there is variety in climatic conditions.

(a) Longitudinal

(b) latitudinal & Longitudinal

( c ) Equatorial

(d) latitudinal

**Q.2 Identify the wrong pair.**

**( 4 )**

(1) States and density of population.

(a) Sau Paulo ---- Densely populated

(b) Himachal Pradesh ----Densely populated

( c ) Amazonas ---Sparsely populated

(d) West Bengal --- Densely populated

2) Directions & neighbouring countries.

(a) Country towards North of Brazil ---- Guyana

(b) Country towards west of Brazil ----- Peru

( c ) Country towards south of Brazil ---- Argentina

(d ) Country towards east of Brazil ---- French Guyana

3) Mountain ranges and peak:

(a) Karakoram ----- K2

(b) Guyana Highlands ----Pico-de-Neblina

( c ) Mahadev hills ----- Kalsubai

(d) Eastern Ghats --- Mahendragiri

4) Forests and trees:

(a) Evergreen forests --- mahogany

(b) Deciduous forests ----Teak

( c ) Thorny shrub forests --- Khejdi

(d) mangrooves --- Rubber

Q3. Answer the following (any two)

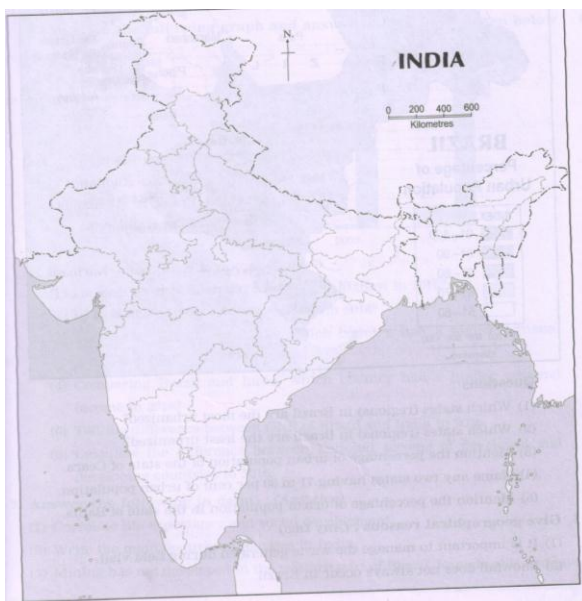
( 4 )

1. Differentiate between : Fishing in Brazil & India
2. Write short note on : Amazon River Basin
3. Name the following : Main tributaries of River Ganga
4. State true or false : Vegetation is an indicator of difference in precipitation

Q4. (A) Mark on outline map of India. Write the names and give index (any four)

( 4 )

- |                 |                     |                   |
|-----------------|---------------------|-------------------|
| 1. Indira point | 2. Kolkata fort     | 3.Tiger of Bengal |
| 4. Sikkim       | 5. One horned Rhino | 6. Western Ghat   |

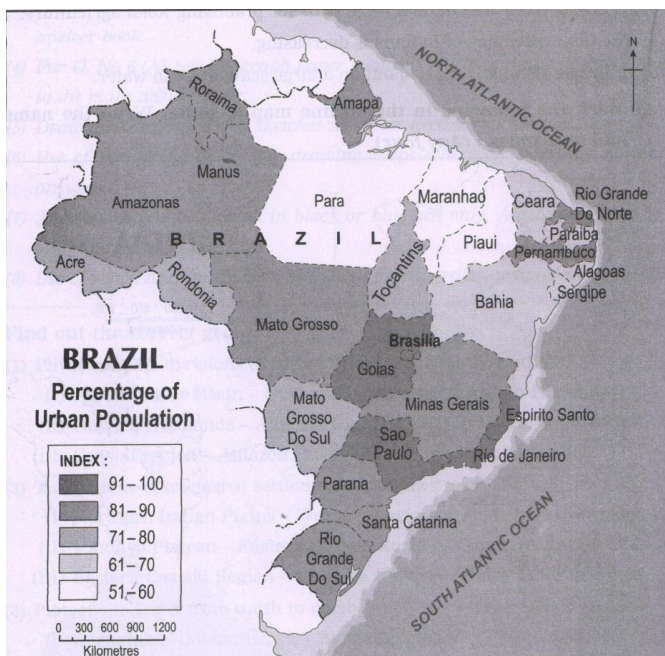


**Q.4 B) Observe the map of Brazil and answer questions (any four)**

**(4)**

Questions:

1. Which states in Brazil are the most urbanized?
2. Mention the percentages of urban population of the state of Ceara.
3. Mention the percentage of urban population in the state of Bahia.
4. Which states in Brazil are the least urbanized?
5. Name any 2 states having 71% to 80 % of urban population.
- 6.



**Q.5 Give Geographical Reasons (any two )**

**( 6 )**

1. We rely on the sea routes for international trade
2. Snowfall does not always occur in Brazil.
3. Population density is high in Ganga plains.
4. Brazil is known as 'World coffee pot'

**Q.6 With the help of given statistical data prepare a simple bar graph and answer the following**

Year	1990	2000	2010
Brazil	74.6	81.5	84.6
India	25.6	27.8	31.2

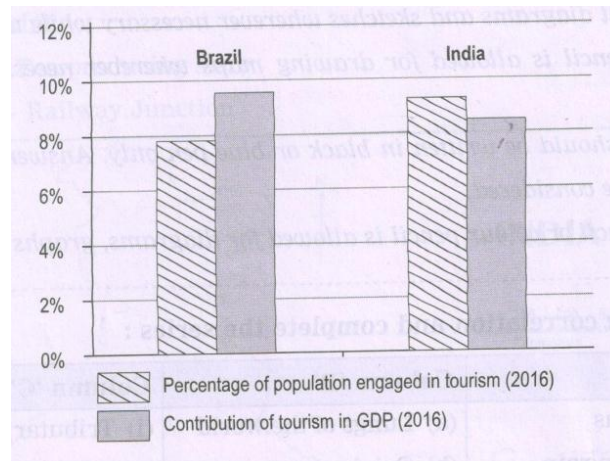
Questions:

1. In which decade was the growth of urbanization highest in India?
2. What does the trend in urban population in both countries indicate?
3. In which decade was the growth of urbanization highest in Brazil?

OR

**Q.6(B) Observe the following graph and answer the questions given below**

**( 6 )**



**Questions:**

1. Which type of graph is shown here?
2. What does graph show?
3. Which country's tourism has a large share in the contribution towards GDP?
4. What is the share of tourism in India's GDP?
5. Which year statistical data is shown in the above graph?
6. Which country has a large population engaged in tourism sector but contributes lesser in GDP?

**Q.7 Answer the following in detail (any two)**

**(8)**

1. What items will you take with you for field visit?
2. Explain nature of communication in Brazil
3. Correlate life expectancy and social development .

\*\*\*\*\**Best of Luck*\*\*\*\*\*